



MD 2006

How many oranges did Sammy sell?




Sammy had a cart and he had fun selling oranges in the sun.

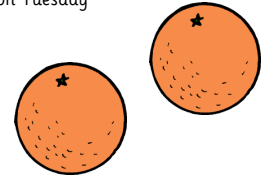


How many oranges did he sell?

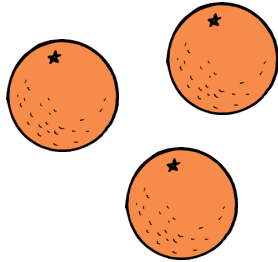
1 on Monday



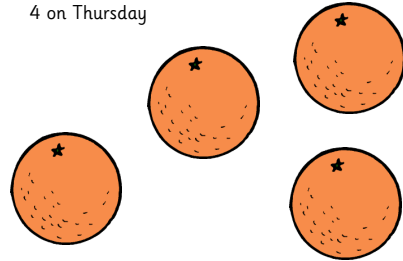
2 on Tuesday




3 on Wednesday



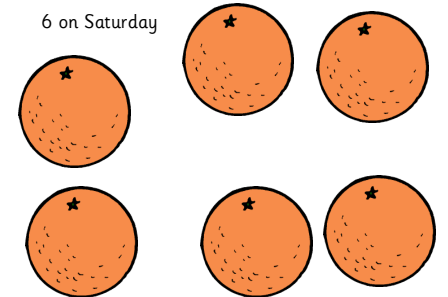
4 on Thursday




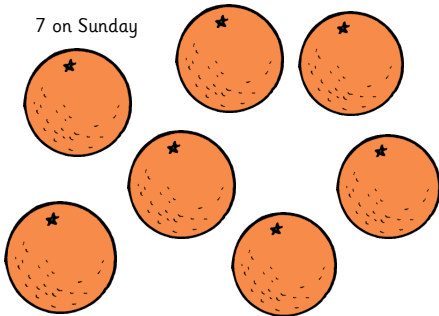
5 on Friday



6 on Saturday

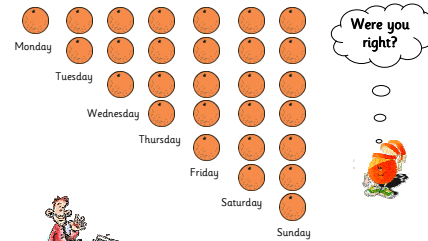


7 on Sunday



Can you count them?
Can you tell?

How many oranges did he sell?



Were you right?



Can you count them?
Can you tell?
How many oranges did he sell?

